

Name

My Homework

Lesson 8

Add in Any Order

Homework Helper



Need help? connectED.mcgraw-hill.com



You can change the order of the addends and get the same sum.



  $4 + 5 = 9$



  $5 + 4 = 9$



Practice

Write the addends. Then add.

1.  
_____ + _____ = _____

 
_____ + _____ = _____

2.  
_____ + _____ = _____

 
_____ + _____ = _____

Add. Circle the addends that have the same sum.

3. $6 + 5 =$ _____

$5 + 6 =$ _____

4. $3 + 5 =$ _____

$3 + 6 =$ _____

Write two ways to add. Solve.

5. Greg walks up 7 **steps** to get to his apartment. Bill walks up 8 **steps** to get to his apartment. How many **steps** do they walk up in all?

_____ + _____

_____ + _____

_____ **steps**



Test Practice

6. Lynn walks 3 **blocks** to the library. Then she walks 8 **blocks** to her dance lesson. How many **blocks** does she walk in all?

9

10

11

12



Math at Home Show your child 4 plates and 2 cups. Have him or her write two addition sentences about them.